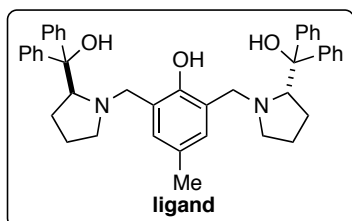
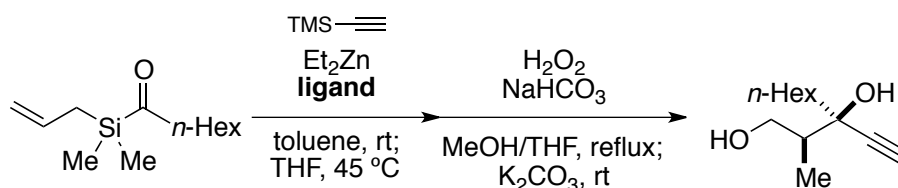
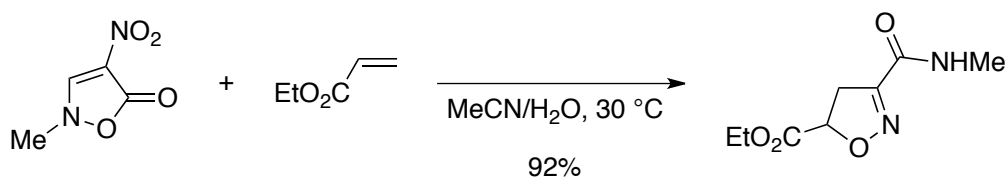


Name \_\_\_\_\_

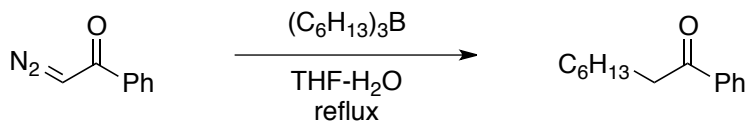
1.

I. Marek *et al.*, *Angew. Chem. Int. Ed.*, **52**, 13717 (2013)

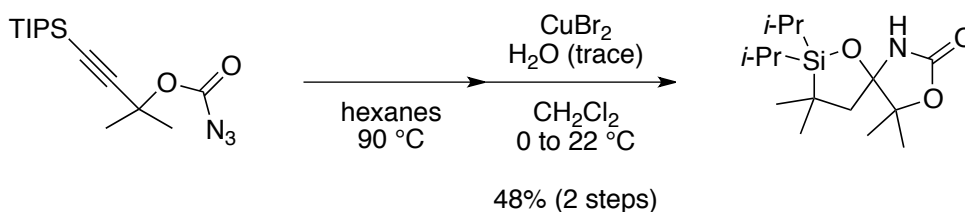
2.

N. Nishiwaki *et al.*, *Org. Biomol. Chem.*, **9**, 2832 (2011)

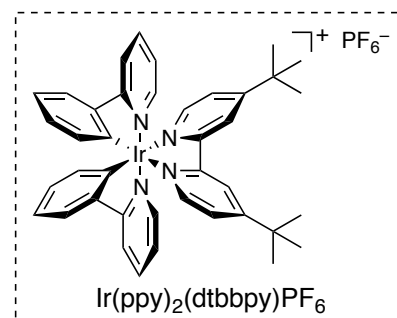
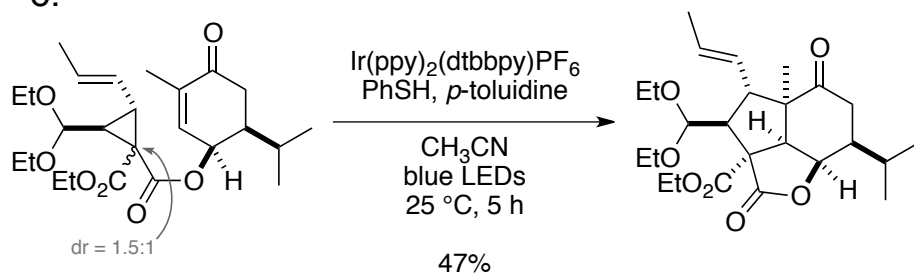
4.


 演習で学ぶ有機反応機構B83 (化学同人)  
 J. Hooz and H. Kono, *J. Org. Synth., Coll. Vol. VI*, 919 (1988)

5.

J. A. May *et al.*, *Chem. Sci.*, **8**, 7132 (2017)

6.

Z. Yang *et al.*, *J. Am. Chem. Soc.*, **139**, 13989 (2017)

3. Provide the  $pK_a$  values of these acids. You may round off the values to the nearest whole number.

